

# 45 45 90 Triangle Worksheet

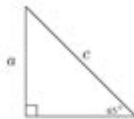
Geometry: 45-45-90 Triangles



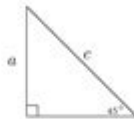
Solve the 45-45-90 triangle for the indicated side.

Type 1: Leg is given

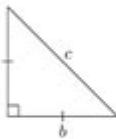
1. If  $a = 3$ , solve for  $c$ .



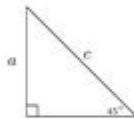
2. If  $a = 6$ , solve for  $c$ .



3. If  $b = 7$ , solve for  $c$ .

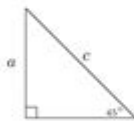


4. If  $a = 11$ , solve for  $c$ .

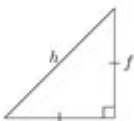


...

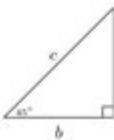
5. If  $a = 6\sqrt{2}$ , solve for  $c$ .



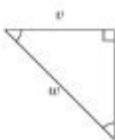
6. If  $f = 2\sqrt{2}$ , solve for  $h$ .



7. If  $b = 7\sqrt{2}$ , solve for  $c$ .



8. If  $v = 11\sqrt{2}$ , solve for  $w$ .



## 45-45-90 Triangle Worksheet: Your Key to Mastering Isosceles Right Triangles

Are you struggling to grasp the intricacies of 45-45-90 triangles? Do you need a practical tool to solidify your understanding and improve your problem-solving skills? Then you've come to the right place! This comprehensive guide provides you with everything you need to conquer 45-45-90 triangles, including a downloadable 45-45-90 triangle worksheet packed with practice problems, helpful explanations, and valuable tips to boost your geometry expertise. Let's dive in!

# Understanding the 45-45-90 Triangle

A 45-45-90 triangle, also known as an isosceles right triangle, is a special type of right-angled triangle where two of its angles measure 45 degrees each, and the third angle, naturally, measures 90 degrees. This unique structure leads to a consistent ratio between its sides, making calculations significantly simpler than with general right-angled triangles. This simplification is incredibly useful in various fields, from architecture and engineering to computer graphics and game development.

## The Special Relationship: Side Lengths and the Pythagorean Theorem

The beauty of the 45-45-90 triangle lies in its predictable side ratios. Because it's an isosceles triangle, the two legs (the sides opposite the 45-degree angles) are always equal in length. Let's call the length of each leg 'x'. Applying the Pythagorean theorem ( $a^2 + b^2 = c^2$ ), where 'a' and 'b' are the legs and 'c' is the hypotenuse (the side opposite the 90-degree angle), we find a crucial relationship:

$$x^2 + x^2 = c^2$$

$$2x^2 = c^2$$

$$c = x\sqrt{2}$$

This means the hypotenuse is always  $\sqrt{2}$  times the length of each leg. Understanding this relationship is the foundation for solving problems involving 45-45-90 triangles.

## Using the 45-45-90 Triangle Worksheet Effectively

To truly master 45-45-90 triangles, practice is key. Our downloadable 45-45-90 triangle worksheet (link to be inserted here - this would ideally link to a downloadable PDF) provides a structured approach to enhancing your skills. The worksheet includes a variety of problems, ranging from simple calculations to more complex scenarios involving trigonometry and applications in real-world contexts.

#### Types of Problems Included in the Worksheet:

Finding the length of a leg given the hypotenuse: These problems require you to work backward from the hypotenuse length to determine the length of the equal legs.

Finding the length of the hypotenuse given a leg: This involves applying the relationship  $c = x\sqrt{2}$  directly.

Solving problems involving area and perimeter: These problems require you to combine your understanding of side ratios with the formulas for area and perimeter.

Applying trigonometry: Some problems may involve using trigonometric functions (sine, cosine,

tangent) to find angles or side lengths.

Real-world applications: The worksheet incorporates problems that showcase the practical application of 45-45-90 triangles in various fields.

## **Tips for Using the Worksheet:**

Start with the basics: Begin with the simpler problems to build confidence and reinforce fundamental concepts.

Show your work: Clearly demonstrate each step of your calculations to identify potential errors and strengthen your understanding.

Use diagrams: Sketching diagrams can help visualize the problem and simplify the solution process.

Check your answers: Compare your answers to the solutions provided (included in the worksheet or a separate answer key) to identify areas needing improvement.

Review and repeat: Don't hesitate to revisit challenging problems or sections until you feel comfortable with the concepts.

## **Beyond the Worksheet: Further Exploration**

Once you've completed the worksheet, you can expand your knowledge by exploring more advanced topics related to 45-45-90 triangles. This could include:

Three-dimensional geometry: Applying the principles of 45-45-90 triangles to solve problems involving cubes, pyramids, and other three-dimensional shapes.

Trigonometric identities: Exploring how 45-45-90 triangles relate to broader trigonometric concepts.

Advanced applications: Investigating how these triangles are used in fields such as surveying, navigation, and architectural design.

## **Conclusion**

Mastering 45-45-90 triangles is a crucial step in your journey to becoming proficient in geometry. By utilizing our 45-45-90 triangle worksheet and following the tips outlined in this guide, you'll gain a solid understanding of these special triangles and their applications. Remember, consistent practice and a focused approach are key to achieving success. Download your worksheet today and start your path to geometry mastery!

## **FAQs**

1. Where can I find the solutions to the worksheet problems? Solutions will be included in a separate answer key document linked alongside the worksheet.
2. Are there any prerequisites for using this worksheet? A basic understanding of right-angled triangles and the Pythagorean theorem is helpful but not strictly required. The worksheet itself provides explanations to guide you.
3. Can I use a calculator for the problems? Yes, you are encouraged to use a calculator, especially for more complex problems involving square roots.
4. What if I'm still struggling after completing the worksheet? Don't hesitate to review the explanations provided and seek additional help from your teacher, tutor, or online resources.
5. Are there any alternative resources available for learning about 45-45-90 triangles? Yes, numerous online tutorials, videos, and interactive exercises are available, providing alternative learning pathways. Searching for "45-45-90 triangle tutorial" on your preferred search engine will provide ample options.

**45 45 90 triangle worksheet:** *Standards-Driven Power Geometry I (Textbook & Classroom Supplement)* Nathaniel Rock, 2005-08 Standards-Driven Power Geometry I is a textbook and classroom supplement for students, parents, teachers and administrators who need to perform in a standards-based environment. This book is from the official Standards-Driven Series (Standards-Driven and Power Geometry I are trademarks of Nathaniel Max Rock). The book features 332 pages of hands-on standards-driven study guide material on how to understand and retain Geometry I. Standards-Driven means that the book takes a standard-by-standard approach to curriculum. Each of the 22 Geometry I standards are covered one-at-a-time. Full explanations with step-by-step instructions are provided. Worksheets for each standard are provided with explanations. 25-question multiple choice quizzes are provided for each standard. Seven, full-length, 100 problem comprehensive final exams are included with answer keys. Newly revised and classroom tested. Author Nathaniel Max Rock is an engineer by training with a Masters Degree in business. He brings years of life-learning and math-learning experiences to this work which is used as a supplemental text in his high school Geometry I classes. If you are struggling in a standards-based Geometry I class, then you need this book! (E-Book ISBN#0-9749392-6-9 (ISBN13#978-0-9749392-6-1))

**45 45 90 triangle worksheet: Boot Camp for Your Brain** M. Denmark Manning, 2014-02-06 Do you need to do better on the SAT? The comprehensive material in this book, honed by years of actual results, can help you significantly improve your composite score. No gimmicks, just time-tested techniques that were previously available only to students of The Worlds Best Prep Course, Inc. Put them to work for you and achieve the score you need to get into the college of your choice!

**45 45 90 triangle worksheet: Math Games** Judith A. Muschla, Gary R. Muschla, 2011-02-08 Math Games offers a dynamic collection of 180 reproducible activity sheets to stimulate and challenge your students in all areas of math - from whole numbers to data analysis - while emphasizing problem solving, critical thinking, and the use of technology for today's curriculum! Each of the book's activities can help you teach students in grades 6 through 12 how to think with numbers, recognize relationships, and make connections between mathematical concepts. You pick the activity appropriate for their needs . . . encourage the use of a calculator . . . or provide further challenges with activities that have multiple answers. Designed to be user friendly, all of the ready-to-use activities are organized into seven convenient sections and printed in a lay-flat format for ease of photocopying as many times as needed.

**45 45 90 triangle worksheet: New National Framework Mathematics** M. J. Tipler, 2004  
New National Framework Mathematics features extensive teacher support materials which include dedicated resources to support each Core and Plus Book. The 9 Core Teacher Resource Pack contains a wealth of resources to support and extend the work covered in the 9 Core pupil book and Teacher Planning Pack.

**45 45 90 triangle worksheet: MnM\_POW-Mathematics-PM-07** Manisha Mathur, Me 'n' Mine Pullout Worksheets is a complete resource for practice comprising 3 books for Maths 6-8 and 3 books for Science 6-8, in the form of worksheets through which the learners can revise concepts learnt and identify the areas of improvement. A comprehensive assessment is possible through this series. Unsolved practice papers as per the latest CBSE syllabus and guidelines are included at the end of each book. Along with basic exercises, enriching activities like puzzles and crosswords are added to enhance comprehension of concepts and their applications.

**45 45 90 triangle worksheet: Algebra Teacher's Activities Kit** Judith A. Muschla, Gary R. Muschla, Erin Muschla-Berry, 2015-11-19 Help your students succeed with classroom-ready, standards-based activities The Algebra Teacher's Activities Kit: 150 Activities That Support Algebra in the Common Core Math Standards helps you bring the standards into your algebra classroom with a range of engaging activities that reinforce fundamental algebra skills. This newly updated second edition is formatted for easy implementation, with teaching notes and answers followed by reproducibles for activities covering the algebra standards for grades 6 through 12. Coverage includes whole numbers, variables, equations, inequalities, graphing, polynomials, factoring, logarithmic functions, statistics, and more, and gives you the material you need to reach students of various abilities and learning styles. Many of these activities are self-correcting, adding interest for students and saving you time. This book provides dozens of activities that Directly address each Common Core algebra standard Engage students and get them excited about math Are tailored to a diverse range of levels and abilities Reinforce fundamental skills and demonstrate everyday relevance Algebra lays the groundwork for every math class that comes after it, so it's crucial that students master the material and gain confidence in their abilities. The Algebra Teacher's Activities Kit helps you face the challenge, well-armed with effective activities that help students become successful in algebra class and beyond.

**45 45 90 triangle worksheet: Math Quest-TM** Deepti Jain, Nanita Chopra, Kalpana Gairola, S Purkayastha, A series in Mathematics. The ebook version does not contain CD.

**45 45 90 triangle worksheet: Pre-Algebra Out Loud** Pat Mower, 2016-03-11 An essential guide for teaching students in grades 5-9 how to write about math Learning to read and write efficiently regarding mathematics helps students to understand content at a deeper level. In this third book in the popular math 'Out Loud' series, Mower provides a variety of reading and writing strategies and activities suitable for elementary and middle school pre-algebra courses, covering such key skills as integers and exponents, fractions, decimals and percents, graphing, statistics, factoring, evaluating expressions, geometry and the basics of equations. Includes dozens of classroom tested strategies and techniques Shows how reading and writing can be incorporated in any math class to improve math skills Provides unique, fun activities that will keep students interested and make learning stick This important guide offers teachers easy-to-apply lessons that will help students develop a deeper understanding of mathematics.

**45 45 90 triangle worksheet: Me n Mine POW Mathematics Class 07** Manisha Mathur, Me n Mine Pullout Worksheets Mathematics is a complete practice material for students in the form of worksheets through which they can revise concepts and identify the areas of improvement. Assessment of all the topics can be comprehensively done through these sets. The series also comprises solved and unsolved practice papers as per latest CBSE syllabus and guidelines. Along with the basic exercises the series also comprises various elements of the formative assessment like puzzles, crosswords, projects, etc.

**45 45 90 triangle worksheet: Mathematics Teaching in the Middle School** , 2009-02

**45 45 90 triangle worksheet: Elementary College Geometry** Henry Africk, 2004

**45 45 90 triangle worksheet: New York Math: Math A , 2000**

**45 45 90 triangle worksheet: Landscapes of Power** Dana E. Powell, 2018-01-05 In *Landscapes of Power* Dana E. Powell examines the rise and fall of the controversial Desert Rock Power Plant initiative in New Mexico to trace the political conflicts surrounding native sovereignty and contemporary energy development on Navajo (Diné) Nation land. Powell's historical and ethnographic account shows how the coal-fired power plant project's defeat provided the basis for redefining the legacies of colonialism, mineral extraction, and environmentalism. Examining the labor of activists, artists, politicians, elders, technicians, and others, Powell emphasizes the generative potential of Navajo resistance to articulate a vision of autonomy in the face of twenty-first-century colonial conditions. Ultimately, Powell situates local Navajo struggles over energy technology and infrastructure within broader sociocultural life, debates over global climate change, and tribal, federal, and global politics of extraction.

**45 45 90 triangle worksheet: New National Framework Mathematics 7+ Teacher Resource Pack** M. J. Tipler, 2014-11 New National Framework Mathematics features extensive teacher support materials which include dedicated resources to support each Core and Plus Book. The 7 Plus Teacher Resource Pack contains a wealth of resources to support and extend the work covered in the 7 Plus pupil book and Teacher Planning Pack.

**45 45 90 triangle worksheet: Me n Mine-Mathematics** Saraswati Experts, A book on Mathematics

**45 45 90 triangle worksheet: Mathemind Practice in Mental Maths □ 6** Lata Thergaonkar, 2004 Mathemind series consists of eight workbooks to be used alongside the existing textbooks of mathematics for classes 1-8. The books train the learners to do rapid calculations to acquire proficiency in mathematics. These books provide opportunity to apply various mathematical skills to different situations so as to make systematic thinking a way of life.

**45 45 90 triangle worksheet: MnM\_POW-Maths-PM-9 (Updated)** Kusum Wadhwa, Anju Loomba, MnM\_POW-Maths-PM-9 (Updated)

**45 45 90 triangle worksheet: WORKBOOK MATH CBSE- CLASS 6TH** Arihant Experts, 2017-01-01 The Workbook series as the name suggests has been designed by Arihant with an aim of helping students practice the concepts using hundreds of practice questions of all types which have been or may be asked in the upcoming CBSE Examinations. . It is a practice book aimed at mastering the concepts and acquiring comprehensive knowledge about the varied types of questions asked in CBSE Class 6th Mathematics Examination. The present workbook for CBSE Class 6th Mathematics Examination has been divided into 14 chapters namely Knowing Our Number, Whole Numbers, Playing with Numbers, Basic Geometrical Ideas, Understanding Elementary Shapes, Integers, Fractions, Decimal, Data Handling, Mensuration, Algebra, Ratio & Proportion, Symmetry and Practical Geometry, each containing ample number of practice questions which have been designed on the lines of questions asked in previous years' CBSE Class 6th Mathematics Examination. The book contains hundreds of practice questions like MCQs, True-False, Matching, Fill-Up, VSA, SA, LA, etc. All the questions covered in the book are strictly based on NCERT. The varied types of practice questions will make sure that the students get an insight into the kind of questions asked in the CBSE Class 6th Mathematics Examination. This book is a proven tool to help students score high in the upcoming CBSE Class 6th Mathematics Examination. As the book contains ample number of examination pattern based practice questions, it for sure will act as perfect practice workbook for the upcoming CBSE Class 6th Mathematics Examination.

**45 45 90 triangle worksheet: Florida Preparing for FCAT Mathematics** Kay Williams, 2000

**45 45 90 triangle worksheet: New National Framework Mathematics 7** M.J. Tipler, 2003-07-11 New National Framework Mathematics features extensive teacher support materials which include dedicated resources to support each Core and Plus Book. The 7 Core Teacher Resource Pack contains a wealth of resources to support and extend the work covered in the 7 Core pupil book and Teacher Planning Pack.

**45 45 90 triangle worksheet: Developmental Teaching of Mathematics for the Learning**

**Disabled** John F. Cawley, 1984

**45 45 90 triangle worksheet: 411 SAT Algebra and Geometry Questions**, 2006 In order to align the SAT with the math curriculum taught in high schools, the SAT exam has been expanded to include Algebra II materials. 411 SAT Algebra and Geometry Questions is created to offer you a rigorous preparation for this vital section. If you are planning to take the SAT and need extra practice and a more in-depth review of the Math section, here's everything you need to get started. 411 SAT Algebra and Geometry Questions is an imperative study tool tailored to help you achieve your full test-taking potential. The most common math skills that you will encounter on the math portion of the SAT are covered in this book. Increase your algebra and geometry skills with proven techniques and test your grasp of these techniques as you complete 411 practice questions, including a pre- and posttest. Follow up by reviewing our comprehensive answer explanations, which will help measure your overall improvement. The questions are progressively more difficult as you work through each set. If you can handle the last question on each set, you are ready for the SAT! Book jacket.

**45 45 90 triangle worksheet: Middle School Math with Pizzazz!: E. Ratio and proportion; Percent; Statistics and graphs; Probability; Integers; Coordinate graphing; Equations** Steve Marcy, 1989

**45 45 90 triangle worksheet: Geometry Teacher's Activities Kit** Judith A. Muschla, Gary Robert Muschla, 2000-04-12 For all math teachers in grades 6-12, this practical resource provides 130 detailed lessons with reproducible worksheets to help students understand geometry concepts and recognize and interpret geometry's relationship to the real world. The lessons and worksheets are organized into seven sections, each covering one major area of geometry and presented in an easy-to-follow format including title focusing on a specific topic/skill, learning objective, special materials (if any), teaching notes with step-by-step directions, answer key, and reproducible student activity sheets. Activities in sections 1-6 are presented in order of difficulty within each section while those in Part 7, A Potpourri of Geometry are open-ended and may be used with most middle and high school classes. Many activities throughout the book may be used with calculators and computers in line with the NCTM's recommendations.

**45 45 90 triangle worksheet: CBSE Chapterwise Worksheets for Class 9** Gurukul, 30-07-21 Practice Perfectly and Enhance Your CBSE Class 9th preparation with Gurukul's CBSE Chapterwise Worksheets for 2022 Examinations. Our Practicebook is categorized chapterwise topicwise to provide you in depth knowledge of different concept topics and questions based on their weightage to help you perform better in the 2022 Examinations. How can you Benefit from CBSE Chapterwise Worksheets for 9th Class? 1. Strictly Based on the Latest Syllabus issued by CBSE 2. Includes Checkpoints basically Benchmarks for better Self Evaluation for every chapter 3. Major Subjects covered such as Science, Mathematics & Social Science 4. Extensive Practice with Assertion & Reason, Case-Based, MCQs, Source Based Questions 5. Comprehensive Coverage of the Entire Syllabus by Experts Our Chapterwise Worksheets include "Mark Yourself" at the end of each worksheet where students can check their own score and provide feedback for the same. Also consists of numerous tips and tools to improve problem solving techniques for any exam paper. Our book can also help in providing a comprehensive overview of important topics in each subject, making it easier for students to solve for the exams.

**45 45 90 triangle worksheet: APC Learning Mathematics - Class 7 (CBSE) - Avichal Publishing Company** M.L. Aggarwal, Learning Mathematics - Class 7 has been written by Prof. M.L. Aggarwal in accordance with the latest syllabus of the NCERT and Guidelines issued by the CBSE on Comprehensive and Continuous Evaluation (CCE). The subject matter has been explained in a simple language and includes many examples from real life situations. Questions in the form of Fill in the Blanks, True/False statements and Multiple Choice Questions have been given under the heading 'Mental Maths'. Some Value Based Questions have also been included to impart values among students. In addition to normal questions, some Higher Order Thinking Skills (HOTS) questions have been given to enhance the analytical thinking of the students. Each chapter is followed by a

Summary which recapitulates the new terms, concepts and results.

**45 45 90 triangle worksheet: Trigonometry For Dummies** Mary Jane Sterling, 2014-02-06 A plain-English guide to the basics of trig Trigonometry deals with the relationship between the sides and angles of triangles... mostly right triangles. In practical use, trigonometry is a friend to astronomers who use triangulation to measure the distance between stars. Trig also has applications in fields as broad as financial analysis, music theory, biology, medical imaging, cryptology, game development, and seismology. From sines and cosines to logarithms, conic sections, and polynomials, this friendly guide takes the torture out of trigonometry, explaining basic concepts in plain English and offering lots of easy-to-grasp example problems. It also explains the why of trigonometry, using real-world examples that illustrate the value of trigonometry in a variety of careers. Tracks to a typical Trigonometry course at the high school or college level Packed with example trig problems From the author of Trigonometry Workbook For Dummies Trigonometry For Dummies is for any student who needs an introduction to, or better understanding of, high-school to college-level trigonometry.

**45 45 90 triangle worksheet: Me n Mine-Mathematics- Term-1** Saraswati Experts, A text book on Maths

**45 45 90 triangle worksheet: Scott, Foresman Geometry: Worksheets** , 1990

**45 45 90 triangle worksheet: Key Maths GCSE** David Baker, 2002-01-25 Developed for the AQA Specification, revised for the new National Curriculum and the new GCSE specifications. The Teacher File contains detailed support and guidance on advanced planning, points of emphasis, key words, notes for non-specialist, useful supplementary ideas and homework sheets.

**45 45 90 triangle worksheet: Key Maths** Roma Harvey, 2001 Planned, developed and written by practising classroom teachers with a wide variety of experience in schools, this maths course has been designed to be enjoyable and motivating for pupils and teachers. The course is open and accessible to pupils of all abilities and backgrounds, and is differentiated to provide material which is appropriate for all pupils. It provides spiral coverage of the curriculum which involves regular revisiting of key concepts to promote familiarity through practice. This teacher's file is designed for Year 8.

**45 45 90 triangle worksheet: BeeOne Grade 6 Math Workbook 2020 Edition** Mrs Lakshmi Chintaluri, 2018-01-01 Strengthen your Sixth grader's math learning and skills with Grade1to6.com workbooks. Worksheets in this workbook will enhance and strengthen the skills in Number systems Operation with numbers Addition Subtraction Multiplication Division Order of Operations Index & Exponent Fractions Decimals Percentages Polygons Area Volume Capacity Probability Statistics Transformation Sets Line Graphs Important Features of this Book These 551 high quality worksheets which will make your child perfect in Math. Suitable for a Grade 6 student globally. Aesthetic design helps children fall in love with Math. Aligned with Latest Curriculum of 2020 The worksheets are aligned with the latest curriculum of Enhanced PYP, Common Core, K2, Singapore Math, Australian Curriculum, CBSE & all well-known International Curriculum Conceptual Learning Assured Every single worksheet and workbook of BeeOne Books is focused on conceptual learning to assist children understand and perfect their learning. Once the concepts are clear, Good Grades are assured Lowest Price We understand the importance of price for teachers & parents, we keep our costs low to ensure we provide you Global standards workbook at the Lowest Price Design This workbook features well designed worksheets with examples given in most of them and ideal for use throughout the year to support classroom work, to help with internal assessments, holiday practice and to revise for the end-of- year examinations at school. Ideal for teachers who are teaching Grade 2 students, parents whose children are in Grade 2 and home schoolers. About BeeOne Books & [www.grade1to6.com](http://www.grade1to6.com) Publishers of 100's of high-quality, well designed & result oriented Workbooks suitable for Grade 1 to 6 Are the creators of [www.grade1to6.com](http://www.grade1to6.com), the World's leading worksheet website of high-quality Math & English Worksheets for Grade 1 to 6 created by reputed teachers worldwide. The Grade1to6.com workbook series focuses on global standards worksheets created by experienced teachers and designed aesthetically for easy understanding. Beeone Books is rated a



high 4.8 out of 5 in Teachers pay Teachers and used by 1000's of teachers worldwide. See some of the testimonials by users who are mostly well acclaimed teachers. Imogen D Great to reinforce knowledge taught. December 7, 2019 Gail. S Wow. Comprehensive and easy to choose necessary additional resources when I need it to supplement my Math Program. November 26, 2019 Michelle L. Great for modified programs in elementary. November 7, 2019 Toni B. Good material for practice October 28, 2019 Randeep D. Everything was so organized! very happy to have found this. July 3, 2019 Lisa B. This is easy to grab and print when you need just some straight up practice. This is a fantastic package. The Canadian curriculum is a little different, so I'm able to use parts of this for all the different levels of students in my class - from grade 2 to grade 6. June 27, 2019 Rachel S. Great product for longer worksheets. A few can be finished in a minute; you have to be selective for longer work sessions. June 10, 2019 Sharon W. Excellent! loved it. June 10, 2019 Lilli H. Great resource for my differentiated students. April 29, 2019 Emily R. This is great! March 30, 2019 Janice M. Good angle work. My class loved it. March 20, 2019 Melissa M S. A great review resource. March 12, 2019 Lesley A. Great resource. February 15, 2019 Erika B. Great resource, thank you. November 13, 2018 Charise G. Great math supplement! June 18, 2018 Daniela S. Great! June 10, 2018 TeachPlanBeHappy Awesome resource! thanks! May 7, 2018

**45 45 90 triangle worksheet: Me n Mine POW Mathematics Class 06** Manisha Mathur, Me n Mine Pullout Worksheets Mathematics is a complete practice material for students in the form of worksheets through which they can revise concepts and identify the areas of improvement. Assessment of all the topics can be comprehensively done through these sets. The series also comprises solved and unsolved practice papers as per latest CBSE syllabus and guidelines. Along with the basic exercises the series also comprises various elements of the formative assessment like puzzles, crosswords, projects, etc.

**45 45 90 triangle worksheet: Mathematics Made Simple - 6** A R Kumar, Mathematics Made Simple is a study material based on NCERT textbooks for Classes 6 to 8. The series is strictly based on the guidelines of the National Curriculum Framework and will help students master to solve all the varieties of questions. This is a series of comprehensive practice books designed to help students understand and apply Mathematics in an interesting manner.

**45 45 90 triangle worksheet: CBSE Chapterwise Worksheets for Class 10** Gurukul, 2021-07-30 Practice Perfectly and Enhance Your CBSE Class 10th Board preparation with Gurukul's CBSE Chapterwise Worksheets for 2022 Examinations. Our Practicebook is categorized chapterwise topicwise to provide you in depth knowledge of different concept topics and questions based on their weightage to help you perform better in the 2022 Examinations. How can you Benefit from CBSE Chapterwise Worksheets for 10th Class? 1. Strictly Based on the Latest Syllabus issued by CBSE 2. Includes Checkpoints basically Benchmarks for better Self Evaluation for every chapter 3. Major Subjects covered such as Science, Mathematics & Social Science 4. Extensive Practice with Assertion & Reason, Case-Based, MCQs, Source Based Questions 5. Comprehensive Coverage of the Entire Syllabus by Experts Our Chapterwise Worksheets include "Mark Yourself" at the end of each worksheet where students can check their own score and provide feedback for the same. Also consists of numerous tips and tools to improve problem solving techniques for any exam paper. Our book can also help in providing a comprehensive overview of important topics in each subject, making it easier for students to solve for the exams.

**45 45 90 triangle worksheet: BeeOne Grade 5 Math Workbook 2020 Edition** Mrs Lakshmi Chintaluri, 2020-02-09 BeeOne Grade 5 Math Workbook 2020 Edition 363 pages of Worksheets for Grade 5 featuring Global standard worksheets of PYP(IB), US Common Core Standards, UK National Curriculum, Singapore Curriculum, Australian Curriculum, New Zealand Curriculum and suitable for any International curriculum. The topics covered are Number & Place Value, Fractions, Decimals & Percentage, Ratio & Proportion, Mental Math, Written Calculation, Shapes & Geometry, Position & Movement, Length, Mass & Capacity, Time, Area & Perimeter & Handling Data. This E-workbook features well designed worksheets with examples given in most of them and ideal for use throughout the year to support classroom work, to help with internal assessments, holiday practice and to revise

for the end-of- year examinations at school. Important Features of this Book 363 high quality worksheets which will make your child perfect in his/her understanding of all Mathematical concepts for a Grade 5 student globally. Aesthetic design helps children fall in love with Math Aligned with Latest Curriculum of 2020 The worksheets are aligned with the latest curriculum of Enhanced PYP, Common Core, K2, Singapore Math, Australian Curriculum, CBSE & all well-known International Curriculum Conceptual Learning Assured Every single worksheet and workbook of BeeOne Books is focused on conceptual learning to assist children understand and perfect their learnings. Once the concepts are clear, Good Grades are assured Lowest Price We understand the importance of price for parents, we keep our costs low to ensure we provide you Global standards workbook at the Lowest Price Design This workbook features well designed worksheets with examples given in most of them and ideal for use throughout the year to support classroom work, to help with internal assessments, holiday practice and to revise for the end-of- year examinations at school. About BeeOne Books Publishers of 100's of high-quality, well designed & result oriented Workbooks suitable for Grade 1 to 6 Are the creators of [www.grade1to6.com](http://www.grade1to6.com), the World's leading worksheet website of high-quality Math & English Worksheets for Grade 1 to 6 created by reputed teachers worldwide. Beeone Books is rated a high 3.8 out of 4 in Teachers pay Teachers and used by 1000's of teachers worldwide. See some of the testimonials by users who are mostly well acclaimed teachers. Imogen D Great to reinforce knowledge taught. December 7, 2019 Gail. S Wow. Comprehensive and easy to choose necessary additional resources when I need it to supplement my Math Program. November 26, 2019 Michelle L. Great for modified programs in elementary. November 7, 2019 Toni B. Good material for practice October 28, 2019 Randeep D. Everything was so organized! very happy to have found this. July 3, 2019 Lisa B. This is easy to grab and print when you need just some straight up practice. This is a fantastic package. The Canadian curriculum is a little different, so I'm able to use parts of this for all the different levels of students in my class - from grade 2 to grade 6. June 27, 2019 Rachel S. Great product for longer worksheets. A few can be finished in a minute; you have to be selective for longer work sessions. June 10, 2019 Sharon W. Excellent! loved it. June 10, 2019 Lilli H. Great resource for my differentiated students. April 29, 2019 Emily R. This is great! March 30, 2019 Janice M. Good angle work. My class loved it. March 20, 2019 Melissa M S. A great review resource. March 12, 2019 Lesley A. Great resource. February 15, 2019 Erika B. Great resource, thank you. November 13, 2018 Charise G. Great math supplement! June 18, 2018 Daniela S. Great! June 10, 2018 TeachPlanBeHappy Awesome resource! thanks! May 7, 2018

**45 45 90 triangle worksheet:** *S.Chand's Mathematics For Class X Term -I* H.K. Dass, Rama Verma & Bhagwat S. Sharma, S. Chand's Mathematics books for Classes IX and X are completely based on CCE pattern of CBSE. The book for Term I covers the syllabus from April to September and the book for Term II covers the syllabus from October to March.

**45 45 90 triangle worksheet: The Conflict Resolution Toolbox** Gary T. Furlong, 2020-09-16 Learn to effectively resolve conflict the way that works best for you When it comes to real-world conflict resolution, one size does not fit all. In the professional world especially, it's critical for individuals to be prepared for a variety of situations and to know what tools and techniques can be used to settle disputes and disagreements in a way that is respectful of both party's needs. The Conflict Resolution Toolbox shows mediators, negotiators, managers, and professionals at all levels how to simply and effectively assess conflict situations and choose the right tools to resolve the issue in a meaningful way. Understand the why behind the conflict and how it can be resolved Recognize the unconscious judgements and biases that are obstacles to conflict resolution View conflict situations objectively and from multiple viewpoints Learn how the latest neuroscience and behavioral economics research plays a role in conflict resolution With over 25 years of experience in mediation, negotiation, and conflict resolution, author Gary T. Furlong brings to light the intrinsic habits and interpretations that can unwittingly surface and lead to further tension during times of conflict and unrest. This timely update to The Conflict Resolution Toolbox marries theory and practice and is a hands-on guide to understanding the root of conflict and selecting the simple

strategies for addressing specific scenarios that individuals routinely face in the workplace and in life. Conflict may be unavoidable, but resolution is within reach with the invaluable guidance and techniques found in The Conflict Resolution Toolbox.

**45 45 90 triangle worksheet: Assignments in Junior Measurement: Further trigonometry** Paul Steenson, 2004 A collection of fresh and versatile worksheet activities, which may be photocopied for student use. Topics covered include review of trigonometry principles, exact ratios, the Sine Rule, Cosine Rule, problems involving two triangles, area of a triangle, simple trigonometric equations. Suitable for students in Years 7-10.

**45 45 90 triangle worksheet: Math Makes Sense 5: v.2. Math makes sense 5 practice and homework book, teacher's edition** Ray Appel, Peggy Morrow, Maggie Martin Connell, Pearson Education Canada, 2010

45 -

45

? -

1984“”199317.3—11.3Kpa (130—85mmHg)17.318.6Kpa (130—139mmHg) ...

9mm.45 -

Jan 18, 2013 · 9mm Luger19029mm.451933take over . 459mm ...

HPV? -

HPV31334552585 HPV ...

45# -

45 PVD ...

-

2011 1 ...

30°60°45° cos tan sin ...

sin304590cos30,45,603tan30°tan60° tan45° 1

**[FIXED] Cursor Bug: Can't Fully Turn Character 360° : r ... - Reddit**

Feb 14, 2023 · If you can't turn your character 360° in game and have your cursor showing up outside a certain radius of your crosshair, sign into the new EA App and turn off "In-game ...

-

7 RQ GARMIN 955APEX 2 Pro GT Runner ...

50 ...

199 ...

45 -

